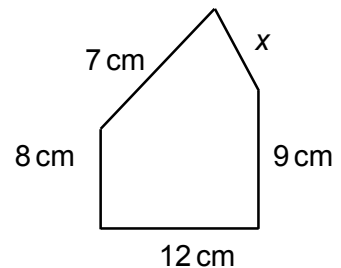
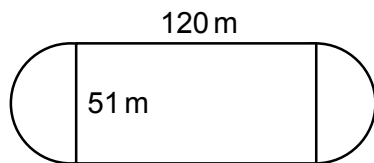


Topic Check In - 10.02 Perimeter calculations

1. Calculate the perimeter of a square with sides 6 cm.
2. Calculate the perimeter of a rectangle with sides 5 cm by 8 cm.
3. Calculate the circumference of a circle of diameter 4 cm.
4. The perimeter of this shape is 39 cm. Work out the length of x .

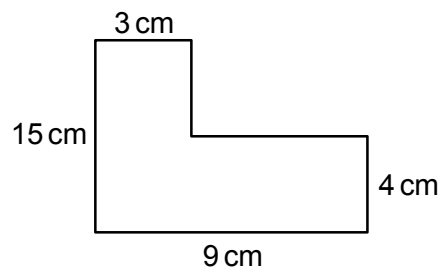


5. Calculate the perimeter of a semicircle of radius 12 cm.
6. Jim has a circle of radius 7 cm. He says the circumference is 21.99 cm. Explain why he is wrong.
7. Jo is training for a race. She runs around this track.



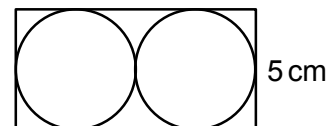
Show that she needs to complete at least 13 laps to have run 5 km.

8. Calculate the perimeter of the shape below.



9. A pond which is rectangular in shape has a length which is 3 times its width. The perimeter of the pond is 16 m. Work out the dimensions of the pond.

10. Two identical circles are drawn inside a rectangle. Which is larger, the circumference of the two circles added together, or the perimeter of the rectangle?



GCSE (9–1) MATHEMATICS

Extension

Darren has 36 m of fencing. He needs to make a pen in the shape of a rectangle. Investigate the different perimeters he could use. Which one would give him the largest area?

Consider different shapes for the 36 m perimeter pen. Investigate with different lengths of fencing.



GCSE (9-1) MATHEMATICS

Answers

1. 24 cm
2. 26 cm
3. 12.6 cm (1dp)
4. 3 cm
5. 61.7 cm (1dp)
6. He has multiplied the radius by pi not the diameter (should be 44.0 cm).
7. $\pi \times 51 + 240 \approx 397$
 $5000 \div 397 \approx 12.6$
So 13 full laps are > 5 km
8. 48 cm
9. $2 \text{ m} \times 6 \text{ m}$
10. For the rectangle: $5 + 10 + 10 + 5 = 30 \text{ cm}$
For the circles: $\pi \times 5 \times 2 = 31.4 \text{ cm}$
So circumference of circles larger

Extension

17×1 , 16×2 , 15×3 , 14×4 , 13×5 , 12×6 , 11×7 , 10×8 , 9×9
 9×9 would give the biggest area (81 m^2)

A circle pen would give the biggest area:

$$36 = \pi d$$

$$\frac{36}{\pi} = d = 11.46 \text{ (2dp)}$$

$$r = \frac{d}{2} = 5.73 \text{ (2dp)}$$

$$A = \pi r^2 = 103.1 \text{ m}^2 \text{ (1dp)}$$



GCSE (9-1) MATHEMATICS



We'd like to know your view on the resources we produce. By clicking on the 'Like' or 'Dislike' button you can help us to ensure that our resources work for you. When the email template pops up please add additional comments if you wish and then just click 'Send'. Thank you.

OCR Resources: *the small print*

OCR's resources are provided to support the teaching of OCR specifications, but in no way constitute an endorsed teaching method that is required by the Board, and the decision to use them lies with the individual teacher. Whilst every effort is made to ensure the accuracy of the content, OCR cannot be held responsible for any errors or omissions within these resources. We update our resources on a regular basis, so please check the OCR website to ensure you have the most up to date version.

© OCR 2015 - This resource may be freely copied and distributed, as long as the OCR logo and this message remain intact and OCR is acknowledged as the originator of this work.

OCR acknowledges the use of the following content: Maths and English icons: AirOne/Shutterstock.com



Assessment Objective	Qu.	Topic	R	A	G
AO1	1	Perimeter of square.			
AO1	2	Perimeter of rectangle.			
AO1	3	Circumference of circle.			
AO1	4	Find missing length given perimeter.			
AO1	5	Perimeter of semicircle.			
AO2	6	Explain formula for circumference.			
AO2	7	Perimeter of composite shape.			
AO2	8	Perimeter of composite shape.			
AO3	9	Solve perimeter problem.			
AO3	10	Perimeter and circumference.			

Assessment Objective	Qu.	Topic	R	A	G
AO1	1	Perimeter of square.			
AO1	2	Perimeter of rectangle.			
AO1	3	Circumference of circle.			
AO1	4	Find missing length given perimeter.			
AO1	5	Perimeter of semicircle.			
AO2	6	Explain formula for circumference.			
AO2	7	Perimeter of composite shape.			
AO2	8	Perimeter of composite shape.			
AO3	9	Solve perimeter problem.			
AO3	10	Perimeter and circumference.			

Assessment Objective	Qu.	Topic	R	A	G
AO1	1	Perimeter of square.			
AO1	2	Perimeter of rectangle.			
AO1	3	Circumference of circle.			
AO1	4	Find missing length given perimeter.			
AO1	5	Perimeter of semicircle.			
AO2	6	Explain formula for circumference.			
AO2	7	Perimeter of composite shape.			
AO2	8	Perimeter of composite shape.			
AO3	9	Solve perimeter problem.			
AO3	10	Perimeter and circumference.			

Assessment Objective	Qu.	Topic	R	A	G
AO1	1	Perimeter of square.			
AO1	2	Perimeter of rectangle.			
AO1	3	Circumference of circle.			
AO1	4	Find missing length given perimeter.			
AO1	5	Perimeter of semicircle.			
AO2	6	Explain formula for circumference.			
AO2	7	Perimeter of composite shape.			
AO2	8	Perimeter of composite shape.			
AO3	9	Solve perimeter problem.			
AO3	10	Perimeter and circumference.			

